

**SAMPLE PAPER
RPS OLYMPIAD (2021-22)
GRADE-III**

ENGLISH

Answer the following questions with the help of the options given below.

- Q.1 The feminine gender of waiter is _____.**
- a) actress
 - b) lioness
 - c) nun
 - d) waitress
- Q.2 Which of the following nouns is a neuter gender?**
- a) Nurse
 - b) Doctor
 - c) Peon
 - d) Thermometer
- Q.3 Select the correct noun which names more than one and completes the sentence given below.**
- He threw some nuts to the _____**
- a) Friend
 - b) Gate
 - c) Monkeys
 - d) Father
- Q.4 Choose the correct preposition to complete the sentence given below.**
- Dhanush walked _____ the street.**
- a) across
 - b) over
 - c) on
 - d) in
- Q.5 A _____ of birds is always a beautiful sight.**
- a) bunch
 - b) flight
 - c) team
 - d) group

Q.6 'Husband, Tiger, Brother' belong to the _____

- a) Masculine Group
- b) Feminine Group
- c) Common Group
- d) None of these

Q.7 Fill in the blank with the correct article.

I am _____ student of Class III

- a) a
- b) an
- c) the
- d) no article

Q. 8 Replace the underlined article with the correct article.

I want to visit an Parliament House.

- a) an
- b) a
- c) the
- d) no article

Q. 9 Choose a suitable adjective to complete the sentence given below.

The _____ clown was playing tricks

- a) hard
- b) soft
- c) funny
- d) new

Q.10 Fill in the blank with the correct pronoun.

Jagat and _____ have been close friends for many years.

- a) me
- b) I
- c) him
- d) Reema

Q.11 Choose the correct conjunction to complete the following sentence.

I wanted to buy a newspaper _____ didn't have enough money.

- a) and
- b) because
- c) or
- d) but

Q.12 Choose the correct option for the jumbled words given below

have/ hours/three/been/studying/ for /we

- a) Three hours been have studying for we
- b) We have been studying for three hours
- c) Three hours have been we for studying
- d) We been have studying for three hours

Q.13 Fill in the blank with the correct conjunction.

We can go by bus _____ we can walk.

- a) but
- b) or
- c) so
- d) none of these

Q.14 Choose the best option to complete the sentence given below.

The Qutub Minar is a _____ monument.

- a) more taller
- b) tall
- c) tallest
- d) short

Q.15 Which of the following is not the correct degree of comparison.

- a) brave
- b) more brave
- c) braver
- d) bravest

EVS

1. The process of producing young ones of the same kind is known as:

- a) Digestion
- b) Reproduction
- c) Breathing
- d) Adaptation

2. An example of a mammal that lay eggs:

- a) Dog
- b) Dolphin
- c) Cat
- d) Duck- billed platypus

3. Which is our national game?

- a) Hockey
- b) Cricket

- c) Football
- d) Badminton

4. The team members/anyone playing a game are/is called a:

- a) Player
- b) Audience
- c) Referee
- d) Conductor

5. Which of these organisms are not decomposers?

- a) Mushrooms
- b) Plants
- c) Bacteria
- d) Earthworms

6. Which of the following is frequently used in kacha houses for support?

- a) Bamboo
- b) Iron rods
- c) Aluminum rods
- d) Glass rods

7. Milk is a complete food because it contains _____

- a) Proteins
- b) Fats
- c) Vitamins
- d) All of the above

8. Which of the following minerals, functions by building strong bones and teeth?

- a) Iodine
- b) Calcium
- c) Iron
- d) Sodium

9. A person who stitches cloth:

- a) Postman
- b) Tailor
- c) Sweeper
- d) Watchman

10. To protect silk and woolen clothes we should put:

- a) Medicine
- b) Salt solution
- c) Benzene solution
- d) Naphthalene balls

11. Various methods by which patterns are made on _____ clothes:

- a) Embroidery
- b) Carving
- c) Steaming
- d) All of the above

12. Who among the following sits on a shop and sells goods?

- a) Fire man
- b) Police man
- c) Shopkeeper
- d) Watchman

13. What does a doctor do?

- a) Cure patients
- b) Teach children
- c) Construct houses
- d) None of these

14. Which of the following things cannot be prepared without cooking?

- a) Chapatti
- b) Lemon water
- c) Salad
- d) Butter bread

15. Which of the following fuels is not used for cooking?

- a) Coal
- b) Petrol
- c) Wood
- d) Cow dung

GENERAL KNOWLEDGE

Q.1- What is the currency of United Kingdom?

- a. Lev
- b. Pound sterling
- c. Bermudian Dollar
- d. None of these

Q.2. What is the national currency of Bangladesh?

- a. Dram
- b. Algerian Dollar
- c. Dinar
- d. Taka

Q.3. Dandiya Ras is a dance form of which state?

- a. Kerala
- b. Bengal
- c. Gujarat
- d. Maharashtra

Q.4. Gidda is a popular folk dance from which state of India?

- a. Punjab
- b. Haryana
- c. Uttar Pradesh

d. Uttarakhand

Q.5. Which star is at the center of our Solar System?

- a. Moon
- b. Sun
- c. Jupiter
- d. Venus

Q.6. Which is the largest planet in our solar system?

- a. Jupiter
- b. Venus
- c. Mercury
- d. Mars

Q.7. Name the inventor of the Steam Engine?

- a. Neil Armstrong
- b. James Watt
- c. Robert E. Kahn and Vint Cerf
- d. Alexander Graham Bell

Q.8. Name the inventor of the Electric bulb?

- a. Neil Armstrong
- b. James Watt
- c. Thomas Alva Edison
- d. Alexander Graham Bell

Q.9. Chandigarh is the capital of which two states of India ?

- a. Goa and Haryana
- b. Bihar and Haryana
- c. Haryana and Punjab
- d. Kerala and Punjab

Q.10. How many states are there in our country?

- a. 26
- b. 27
- c. 28
- d. 30

Q.11. According to the reports by the International Energy Agency, which country is the third largest producer of electricity?

- a. China
- b. India
- c. USA
- d. Russia

Q.12. Who is the current health minister of India?

- a. Nirmala Sitharaman
- b. Rajnath Singh
- c. Harsh Vardhan
- d. Narendra Modi

Q.13. Where is Petra located?

- a. Italy
- b. China
- c. India
- d. Jordan

Q.14. Where is Machu Picchu located?

- a. Italy
- b. China
- c. Peru
- d. India

Q.15. Who is the speaker of Lok Sabha?

- a. Nitish Kumar
- b. Narendra Modi
- c. Om Birla
- d. Amit Shah

MATHEMATICS

1. Seema has 172 red pins and 148 black pins. How many more red pins than black pins does she have?

- a) 36
- b) 42
- c) 28
- d) 24

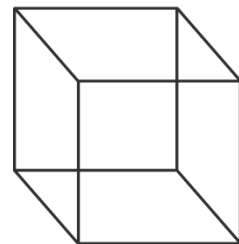
2. A piece of paper is torn. In which column will the number 24 appear?

I	II	III	IV
1	2	3	4
5	6	7	8
9	10	11	12
13	14	15	16
17	18	19	20

- a) II
- b) I
- c) IV
- d) II

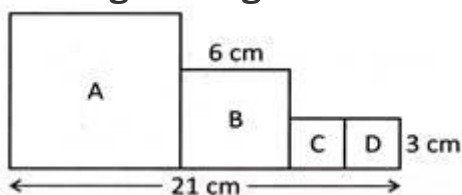
3. Number of sides, number of corners and number of faces in a given solid respectively are _____.

faces



- a) 12, 8, 6
- b) 6, 12, 8
- c) 8, 12, 6
- d) 6, 8, 12

4. The given figure is made up of 4 squares. Find the perimeter of the figure.



- a) 57 cm
- b) 54 cm
- c) 60 cm
- d) 51 cm

5. $126 = \underline{\hspace{2cm}}$

- a) 18×7
- b) 3×42
- c) 9×14
- d) All of the above

6. On adding 2 to a number, it becomes divisible by 3. The same number is divisible by 5 if 1 is subtracted from it. The number can be $\underline{\hspace{2cm}}$

- a) 2862
- b) 6481
- c) 3454
- d) 1005

7. The product on multiplying a number by 24 is 576. If that number is divisible by 12, the quotient is $\underline{\hspace{2cm}}$

- a) 48
- b) 24
- c) 4
- d) 2

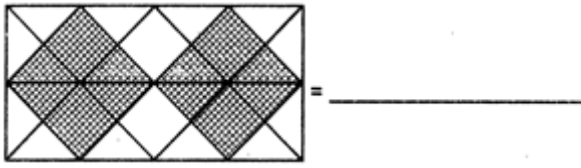
8. If $\square\square\square\square\square\square$ stands for 30, then $\square\square$ will stand for:

- a) 6
- b) 10

c) 12

d) 26

9. Find the fraction of the shaded part.



a) $\frac{16}{32}$

b) $\frac{1}{2}$

c) $\frac{8}{16}$

d) All of the above

10. 8 m 5 cm = _____ cm

a) 850

b) 8005

c) 8050

d) 805

11. Karan bought 5 notebooks for ₹ 5 each and 2 pencils for ₹ 2 each. How much does he have to pay?

a) ₹ 30

b) ₹ 29

c) ₹ 39

d) ₹ 49

12. Which among the following statements is true?

a) 12 a.m. denotes midnight.

b) 12 p.m. denotes noon

c) The second half of the day from noon to midnight is called p.m.

d) All of the above

13. How many prime numbers are there between 9 and 30?

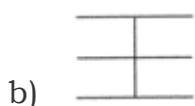
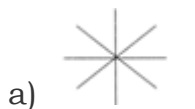
a) 4

b) 6

c) 8

d) 5

14. Four-line segments are joined together in this way that one end point of a line segment meets the other line at an end point. Choose the correct figure from the following options which is formed by the line segments?



c) All of these

d) None of these

15. A wire 48 cm long is bent to form a square. Find the area of the square.

a) 144 cm

b) 116 cm²

c) 96 cm²

d) 144 cm²