

RPS **3rd** All India Online & Offline Mega Event

OLYMPIAD 2022 Golden Opportunity to **win^{to}**

40 Prizes in each class

Phase-I **22** SATURDAY Jan. 2022 (VI to VIII) **23** SUNDAY Jan. 2022 (I to V & IX, X)

Where all the students get equal opportunity to show their brilliance and win amazing prizes!



SCOOTY



TABLETS



KINDLES



BICYCLES



SPORTS KIT

EXAMINATION (PHASE-I)

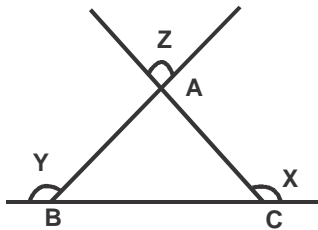
RPS OLYMPIAD- 2022

CLASS-7th

11. _____! The baby is sleeping.
 a) Shhhhh b) Yay c) Yuck d) Oops
12. This sofa is _____ than that.
 a) comfortable b) most comfortable c) more comfortable d) very comfortable
13. Your accent is the _____ in the class.
 a) worst b) worse c) bad d) none
14. The scissors _____ on the table.
 a) is b) are c) does d) was
15. Someone is waiting _____ the library.
 a) outside b) through c) of d) out of

Mathematics (15 Marks)

16. The area of the largest triangle that can be inscribed in a semicircle of radius 10cm is
 a) 25cm^2 b) 50cm^2 c) 100cm^2 d) 200cm^2
17. What number should be added to each of the numbers 3,5,13 and 19 so that the resulting numbers may be in proportion?
 a) 6 b) 2 c) 4 d) 3
18. What is the value of z in terms of x and y?



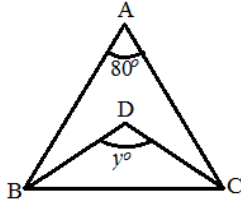
- a) $x + y + 180^0$ b) $x + y - 180^0$ c) $180^0 - (x+y)$ d) $x + y$
19. If $\left(\frac{a}{b}\right)^{x-1} = \left(\frac{b}{a}\right)^{x-3}$, then the value of x is:
 a) -2 b) 1 c) 2 d) 3
20. If $x = 7 - 4\sqrt{3}$ then the value of $x + \frac{1}{x}$ is
 a) 8 b) 12 c) 14 d) 18
21. If ABC and DEF are two triangles such that $\triangle ABC \cong \triangle FDE$ and $AB = 5\text{cm}$, $\angle B = 40^0$ and $\angle A = 80^0$, then which of the following is true?
 a) $DF = 5\text{cm}$, $\angle F = 60^0$ b) $DE = 5\text{cm}$, $\angle E = 60^0$
 c) $DF = 5\text{cm}$, $\angle E = 60^0$ d) $DE = 5\text{cm}$, $\angle D = 40^0$
22. 55% of $1000 \div 60\%$ of $2000 =$
 a) $\frac{11}{24}$
 b) $\frac{12}{25}$
 c) $\frac{13}{24}$ d) $\frac{14}{25}$
23. Find the value of $\frac{0.34 - 0.034}{0.0034 \div 34}$

- a) 0.306 b) 306 c) 3060 d) 0.0306

24. The solution of $0.2(2x - 1) - 0.5(3x - 1) = 0.4$ is

- a) $\frac{1}{11}$ b) $-\frac{1}{11}$ c) $\frac{3}{11}$ d) $-\frac{3}{11}$

25. In the given figure, $\angle A = 80^\circ$, $\angle B = 60^\circ$, $\angle C = 2x^\circ$ and $\angle BDC = y^\circ$. BD and CD bisect angles B and C respectively. The values of x and y respectively are :-



- a) 15° and 70° b) 10° and 160° c) 20° and 130° d) 20° and 125°

26. If the cost price of an item is $\frac{5}{7}$ of its marked price and the profit is 20%, then the percentage of discount is

- a) 20% b) $63\frac{1}{3}\%$ c) $\frac{100}{3}\%$ d) $\frac{100}{7}\%$

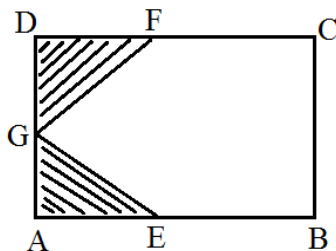
27. The average of the marks in Maths of 100 students in a class was 72. The mean of marks for boys was 75 while their number was 70. The mean of marks of girls in the class was

- a) 35 b) 65 c) 68 d) 86

28. A box contains balls which are numbered 0 to 9. If one ball is drawn randomly, the probability of drawing a number greater than 6 is

- a) $\frac{2}{5}$ b) $\frac{1}{8}$ c) $\frac{1}{3}$ d) $\frac{3}{10}$

29. ABCD is a rectangle having length 30cm and breadth 20cm. E, F and G are mid points of AB, CD and AD respectively, then the area of unshaded part is



- a) 400 cm^2 b) 450 cm^2 c) 375 cm^2 d) 500 cm^2

30. If the range of 10 observations is 68 and its lowest score of the data is 34 then the highest score of the data is

- a) 68 b) 86 c) 102 d) 112

Science (15 Marks)

Physics (5 Marks)

31. A particle covers half the circle of radius r. Then the displacement and distance of the particle are respectively:

- a) $2\pi r, 0$ b) $2r, \pi r$ c) $\frac{\pi r}{2}, 2r$ d) $\pi r, r$

32. A ray of light strikes a plane Mirror PQ at an angle of incidence of 30° , is reflected from the plane Mirror and then strikes a second plane mirror QR placed at right angle of the first mirror. The angle of reflection at the second mirror is

- a) 30° b) 45° c) 60° d) 90°
33. The heat energy required to change a liquid at its boiling point into gaseous state, without any rise in the temperature is called –
a) Latent heat of vaporization b) Specific heat capacity
c) Thermal capacity d) Latent heat of fusion
34. The potential difference between the terminal of an electric iron is 120 v when it draws a current of 4A. What will be the current in the electric iron if the potential difference between the terminal becomes 180v?
a) 4A b) 3.5 A c) 0 A d) 6 A
35. A body starts to slide over a horizontal surface with an initial velocity of 0.5 m/s. Due to friction, its velocity decrease at the rate of 0.05 m/s^2 (acceleration = -0.05 m/s^2). How much time will it take for the body to stop?
a) 2s b) 4s c) 11s d) 10 s

Chemistry (5 Marks)

36. Ammonium is found in many household products such as window cleaners. What is its nature?
a) Basic b) Neutral c) Acidic d) Salty
37. is a member of the camel family. It produces small amounts of extremely fine wool, which is very expensive because the animal can only be shorn every three years and has to be caught from the wild.
a) Llama b) Vicuna c) Alpaca d) Indian camel
38. Anaerobic bacteria digest animal waste and produce biogas (change A). The biogas is then burnt as fuel (change B). The following statements pertain to these changes. Choose the correct one.
a) Process – A is a chemical change. b) Process – B is a chemical change
c) Both processes A and B are chemical change. d) None of these processes is a chemical change.
39. Eris is the ancient water harvesting structures which are still in use today. The water harvesting method 'Eris' belongs to
- a) Tamil Nadu b) Karnataka c) Kerala d) Kandi belt of Jammu Region
40. Who gave the ten percent law for the transfer of energy from one trophic level to the next?
a) Leonhard Euler b) Lindemann c) Amedeo Avogadro d) Isaac Newton

Biology (5 Marks)

41. The cellular energy reserve in an autotroph is –
a) Proteins b) Fatty acids c) Starch d) Glycogen
42. One of the following does not depend on simple diffusion of gases for breathing and respiration. This organism is :
a) Amoeba b) Paramecium c) Prawn d) Leishmania
43. The process by which the oxygenated blood moves from left auricle to left ventricle and then through aorta to all parts of the body is known as
a) Extracellular circulation b) Intracellular circulation
c) Pulmonary circulation d) Systemic circulation
44. How many Polar nuclei are present in an embryo sac ?
a) One b) Two c) Three d) Four
45. The process that regulates the body's salt and water concentration is called :
a) Osmoregulation b) Sweating c) Egestion d) Ingestion

Aptitude (15 Marks)

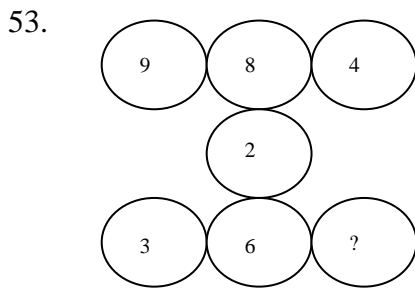
Direction (Q46-Q47) Find the next term: ?

46. 4,2,0.5,0.25,0.5 ?
 a) 10 b) 2.5 c) 2 d) 4
47. 1,0,1,8,81,?
 a) 286 b) 784 c) 1024 d) 841
48. In a certain language FEED is coded as 47, MEET is coded as 118, then TREE is coded as.....
 a) 91 b) 81 c) 101 d) 111
49. **Direction :-**Select the related number from the given alternatives.
 8:36::12:?
 a) 84 b) 59 c) 78 d) 64

Direction (Q50-Q51):- In each of the following questions; four words have been given out of which three are a like in some manner, while the fourth one is different. Choose the word which is different from the rest.

50. a) Morbid b) Swindle c) Deceit d) Fraud
51. a) Radiation b) Concentration c) Confluence d) Concourse
52. Ankit, in order to go to university, started from his house in the east and came to a crossing. The road to the left ends in a theatre, straight ahead is the hospital. In which direction is the university?
 a) South b) North c) East d) West

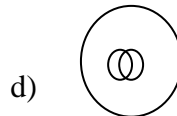

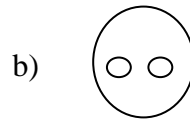
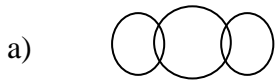
Direction (Q53):- Which one will replace the question mark ?



- a) 6 b) 7 c) 8 d) 9
54. The minute hand of a clock overtakes the hour hand at intervals of 65 minutes. How much in a day does the clock gain or lose?
 a) Gains $56\frac{8}{77}$ min b) Loses $32\frac{8}{11}$ min
 c) Loses $9\frac{10}{143}$ min d) Gains $10\frac{10}{143}$ min
55. My brother is 562 days older to me while my sister is 75 weeks older to him. If my sister was born on Tuesday, on which day was I born?
 a) Sunday b) Monday c) Tuesday d) Thursday

Direction (Q56-Q57) :- Each of these questions given below contains three elements. These elements may or may not have some inter linkage. Each group of elements may fit into one of these diagrams at (A), (B) (C), (D). You have to indicate the group of elements which correctly fits into the diagrams.

56. Profit, Dividend and Bonus.



57. Which one will replace the question mark?

1	2	3	32
2	3	4	287
3	4	5	?

a) 2076

b) 3964

c) 3408

d) 3308

Direction (Q58 to 60): - Study the following set of questions carefully and answer the questions given below

A family of 10 members over three generation goes to a picnic. Kapil is the father of Bobby and has only one son. Ratna is the son-in-law of Atma and the father of Jetha. Sonu is the uncle of Champa. Charu is the aunt of Babita who is the daughter of Daya. Daya is the daughter in law of Kapil. Atma is the mother of Charu who has two children. Each child has both of its parents alive.

58. Three of the following four are alike in the certain way and so form a group. Which is the one that does not belong to the group?

a) Bobby

b) Daya

c) Sonu

d) Charu

59. How many married couples are there in the family?

a) 1

b) 2

c) 3

d) 4

60. How is Kapil related to Champa?

a) Father-in-law

b) Father

c) Grandfather

d) Brother